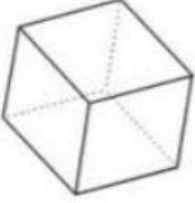

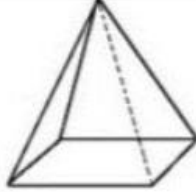


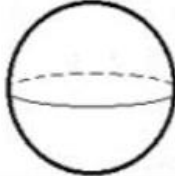
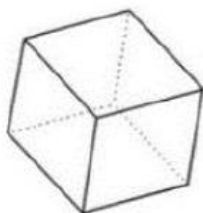


Correction exercices : Les solides


1. Ecris le nom de chaque solide. Tu peux t'aider de ta leçon.

Cube	Cône	Pyramide ...
		
Cylindre	Pavé droit	Boule
		

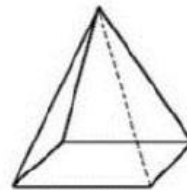
2. Complète le tableau suivant.



A



B



C

	Nombre de faces	Nombre de sommets	Nombre d'arêtes
A	6	8	12
B	6	8	12
C	5	5	8