



# Correction



## Lire l'heure : exercices

### Exercice N°1

Pour chaque horloge, écris l'heure du matin et l'heure de l'après-midi (ou du soir).



2h00



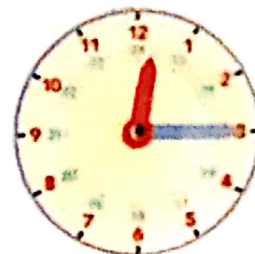
9h30min



3h45min



midi 30 min  
12h30min



midi 15 min  
12h15min

14h00

21h30min

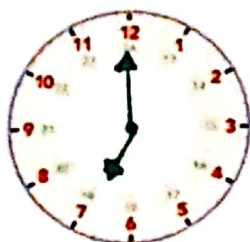
15h45min

minuit 30min  
00h30min

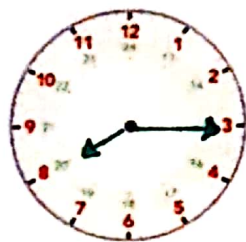
minuit 15 min  
00h15min

### Exercice N°2

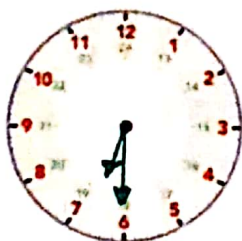
Dessine les aiguilles.



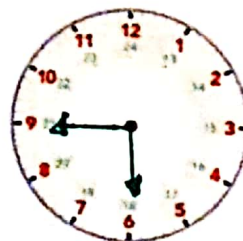
7h00 min



8h15 min



6h30 min



5h45 min



11h00 min