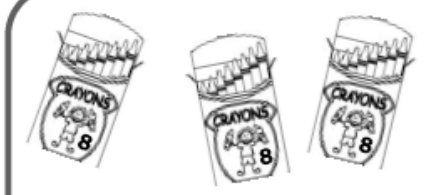
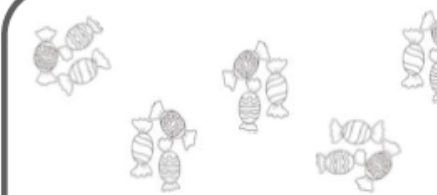
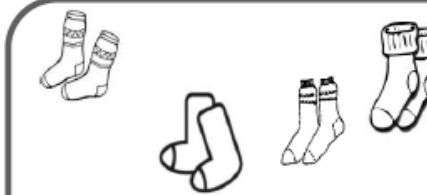
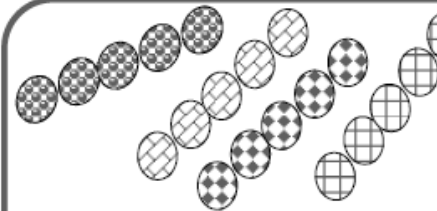
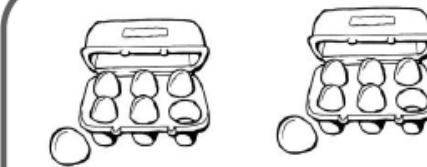


Ecris l'opération sous forme d'addition.

1

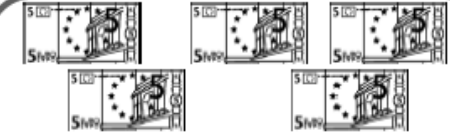


Exemple : $6 + 6 + 6 = 18$



Ecris le résultat sous forme d'addition et de multiplication.

1



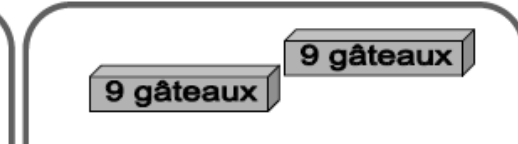
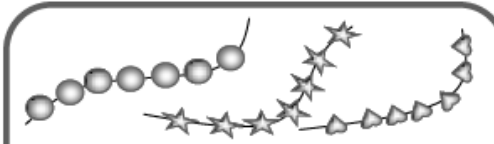
..... =
..... X =

..... =
..... X =



..... =
..... X =

..... =
..... X =



..... =
..... X =

..... =
..... X =

2

Ecris la multiplication et le résultat :

Exemple : $4 + 4 + 4 + 4 + 4 = 5 \times 4 = 20$

$6 + 6 + 6 + 6 = \underline{\quad} \times \underline{\quad} = \underline{\quad}$

$7 + 7 = \underline{\quad} \times \underline{\quad} = \underline{\quad}$

$5 + 5 + 5 + 5 + 5 = \underline{\quad} \times \underline{\quad} = \underline{\quad}$

$10 + 10 + 10 = \underline{\quad} \times \underline{\quad} = \underline{\quad}$

3

Ecris la multiplication quand c'est possible :

$7 + 7 + 7 + 7 + 7 = \underline{\quad}$

$3 + 3 + 3 + 3 = \underline{\quad}$

$8 + 8 + 8 + 8 + 18 = \underline{\quad}$

$4 + 4 + 4 = \underline{\quad}$

$2 + 2 + 2 + 2 + 2 + 2 = \underline{\quad}$