



Ecris le résultat sous forme d'addition et de multiplication de 2 façons différentes.

1



Texte





On compte les carreaux dans chaque ligne :
 $4 + 4 + 4 + 4 + 4 = 20$

On compte les carreaux dans chaque colonne :
 $5 + 5 + 5 + 5 = 20$

$5 \times 4 = 20$

$4 \times 5 = 20$

2



$2 + 2 + 2 + 2 = 8$

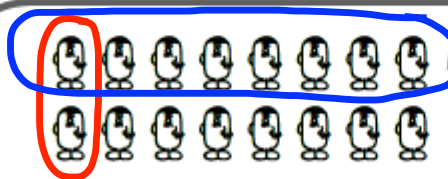
$5 + \dots + \dots + \dots = \dots$

$4 + 4 = 8$


$4 + \dots + \dots + \dots = \dots$

$4 \times 2 = 8$ $2 \times 4 = 8$

$\dots \times 5 = \dots$ $\dots \times 4 = \dots$



Termine les groupements, puis calcule:



$\dots + \dots + \dots + \dots + \dots + \dots + \dots = \dots$

$\dots = \dots$

$\dots + \dots = \dots$

$\dots = \dots$

$\dots \times \dots = \dots$ $\dots \times \dots = \dots$

$\dots \times \dots = \dots$ $\dots \times \dots = \dots$

Il est important de remarquer que : $4 \times 3 = 3 \times 4$