




1 Écris la multiplication correspondant à chaque collection.



$\underline{\quad} \times \underline{\quad} = \underline{\quad}$



$\underline{\quad} \times \underline{\quad} = \underline{\quad}$



$\underline{\quad} \times \underline{\quad} = \underline{\quad}$

2 Calcule les produits.

$9 \times 2 = \underline{\quad}$ $0 \times 2 = \underline{\quad}$ $5 \times 2 = \underline{\quad}$ $4 \times 2 = \underline{\quad}$ $10 \times 2 = \underline{\quad}$

$6 \times 2 = \underline{\quad}$ $3 \times 2 = \underline{\quad}$ $8 \times 2 = \underline{\quad}$ $2 \times 2 = \underline{\quad}$ $7 \times 2 = \underline{\quad}$

3 Colorie selon le code couleur.

- 20 bleu
- 16 vert
- 14 marron
- 12 orange
- 10 rose
- 8 jaune

